

Candidate Marks Report

Series : 6 2018

This candidate's script has been assessed using On-Screen Marking. The marks are therefore not shown on the script itself, but are summarised in the table below.

Centre No :	Assessment Code :	J259
Candidate No :	Component Code :	03
Candidate Name :		

Total Marks : **52 / 90**

In the table below 'Total Mark' records the mark scored by this candidate.
'Max Mark' records the Maximum Mark available for the question.

Paper:	J259/03
Paper	52 / 90
Total:	
Question	Total / Max Mark Mark
1a	1 / 2
1b	0 / 2
1c	1 / 1
2a	1 / 1
2bi	3 / 3
2bii	4 / 4
3a	2 / 2
3bi	3 / 3
3bii	0 / 1
4a	2 / 2
4bi	0 / 3
4bii	2 / 2
5a	0 / 2
5b	3 / 3
6a	0 / 2
6bi	0 / 1
6bii	1 / 2
6c	1 / 3
7a	1 / 2
7bi	2 / 2
7bii	1 / 1
7biii	1 / 1
7c	0 / 2
8a	2 / 2
8b	0 / 2
8ci	2 / 2
8cii	1 / 2
9a	0 / 1
9b	1 / 2
9ci	1 / 2
9cii	0 / 1

10a	0 / 1
10bi	1 / 3
10bii	0 / 2
10ci	1 / 1
10cii	1 / 2
11a	3 / 3
11bi	0 / 1
11bii	0 / 1
12a	2 / 2
12bi	4 / 4
12bii	1 / 4
13a	1 / 1
13b	2 / 4

Answer all the questions.

- 1 Nina is writing a report about the Solar System.

She has written an introduction.

The planets in our Solar System all move around the Sun.
They orbit in perfect circles and in the same direction.
Each planet has at least one moon orbiting it.
The planets and their moons are all made of rock.

- (a) Identify two mistakes in Nina's introduction.

1 ~~Planets~~ Some ~~planets~~ are made of Gas
Planets

2 ~~Some~~ ~~planets~~ have ~~more than one~~
MOON orbiting them.

[2]

- (b) Nina wants to include a section about how the Solar System was formed.

Describe how the Solar System was formed.

Solar system was formed from the big bang
which released energy. The energy allowed reactions
to occur and create substances. These substances
joined together making planets.

[2]

- (c) Nina researches how the Sun releases energy. She finds this information in a textbook.

The Sun releases energy by nuclear fusion. The Sun emits about 4×10^{26} J of energy every second. As a result, its mass falls by about 4 billion kilograms every second.

Explain why nuclear fusion causes the mass of the Sun to decrease.

As the reaction combines gases which create
causes energy to be emitted. Some of the mass
may of been transferred into energy.

[1]



2. A toothbrush uses a rechargeable battery.

(a) The energy that is stored in the battery comes from a power station.

State how the energy is transferred from the power station to the chemical store in the battery.

The energy is transferred electrically from the power station to the chemical store. [1]

(b) The potential difference across the battery is 1.2V.

During a typical use, 360C of charge moves through the toothbrush motor over a time of 2 minutes.

(i) Calculate the total energy transferred by the toothbrush in one day if it is used two times a day.

$$(360 \times 1.2) \times 2 = 864$$

Energy transferred = 864 J [3]

(ii) Calculate the current in the toothbrush when used for 2 minutes each time.

$$Q = C \times t$$

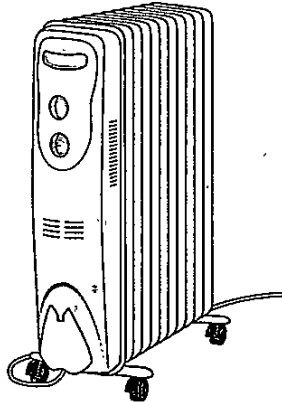
$$C = \frac{Q}{t}$$

$$C = \frac{360}{120} = 3$$

Current = 3 [4]



- 3 The diagram shows a common type of electric heater. It contains oil which is heated by an electrical element.



The table shows some information about the heater.

Electrical power	1500 W
Voltage rating	230 V
Specific heat capacity of oil	1600 J/kg °C
Mass of oil	4.5 kg

- (a) Show that more than 700 000 J of energy is needed to heat the oil from 20 °C to 120 °C.

Use the equation:

change in internal energy = mass × specific heat capacity × change in temperature

$$4.5 \times 1600 \times 100 = 720,000 \text{ J is required}$$

Therefore more than 700,000 J is required.

[2]



- (b) (i) Use your answer to (a) to calculate the minimum time for the oil to reach a temperature of 120 °C, starting at 20 °C.

$$120 - 20 = 100^\circ\text{C} = \Delta t$$

~~100 x 4.5 kg~~

$$\frac{720,000}{1500} = \frac{7200}{15} = 480$$

Minimum time = 480 s [3]

- (ii) In practice, it will take longer than this for the heater to reach 120 °C.

State the reason for this.

As it may not be 100% efficient causing
it to require longer to transfer heat. [1]



- 4 (a) The maximum speed of a racing car is 320 km/hour.

Calculate this speed in metres per second.

$$\begin{aligned} \text{km} &= 1000 \text{ m} \\ 1 \text{ hr} &= 60 \text{ min} \\ 60 \text{ min} &= 3600 \text{ s} \end{aligned}$$

$$\frac{320 \times 1000}{3600} = 88.8$$

Maximum speed = 88.8 m/s [2]

- (b) (i) A different racing car is moving with a speed of 80 m/s.

Before turning a corner, it slows down to a speed of 20 m/s.

While slowing down, it has a constant acceleration of -40 m/s^2 .

Calculate the distance that it travels as it slows down.

$$80 - 20 = 60$$

$$\frac{60}{40} = 1.5$$

$$\frac{40}{(1.5)^2} = 17.7$$

Distance travelled = 17.7 m [3]

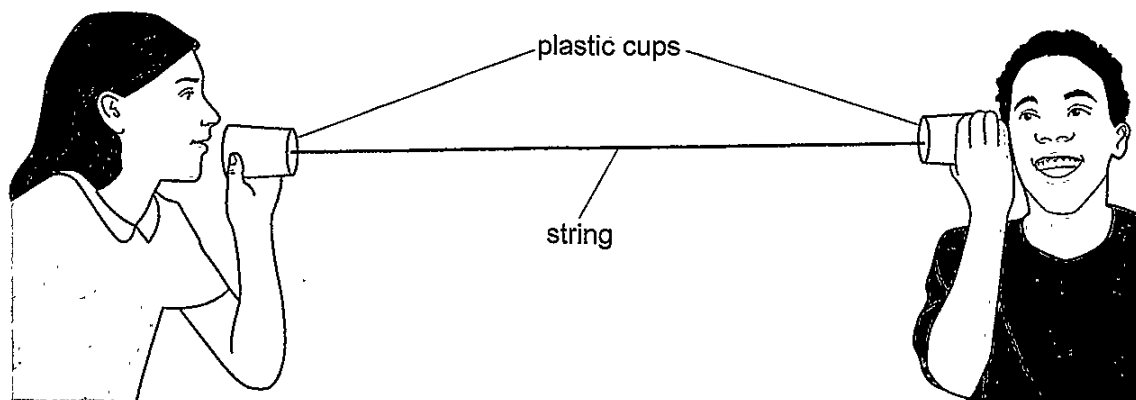
- (ii) The car moves at a constant speed around the corner.

Explain why its velocity is changing as it moves around the corner.

As velocity is speed with a direction. Therefore, velocity changes as the car turns the corner as direction changes. [2]



- 5 Eve and Amir make a toy telephone out of plastic cups and string.



Sound waves in the air change when they become sound waves in the string.

- (a) How do the **speed**, **frequency** and **wavelength** of the sound waves change when they leave the air and enter the string?

Put one tick (✓) in each row. One has been done for you.

	Increase	Decrease	Stay the same
Speed	✓		
Frequency	✓		
Wavelength			✓

[2]

- (b) The speed of sound in the string is 600 m/s.

Calculate the frequency of a sound with wavelength 1.2 m in the string.

$$v = \lambda \times f$$

$$\frac{v}{\lambda} = f$$

$$\frac{600}{1.2} = 500 \text{ Hz}$$

Frequency = ~~500~~ 500 ✓✓✓ Hz [3]



6 James and Mia investigate their hearing.

James uses an app on his phone to make sounds with different frequencies.

For each frequency, he starts with the volume on his phone set at zero.

Then he turns the volume up step by step until Mia can just hear the sound.

The results show the volume setting needed before Mia can hear the noise for each frequency.

Frequency (Hz)	Volume setting
55	13
110	11
220	7
440	1
880	1
1760	1

(a) Explain why Mia finds it easier to hear some of these frequencies.

As our ears are sensitive to certain frequencies therefore we are more easily able to be heard.

[2]

(b) They repeat the experiment.

This time there is a wall between the phone and Mia. They want to see what effect the wall has on the results.

(i) Suggest **one** variable that should be controlled to make this new experiment a fair comparison with the first experiment.

Distance

[1]

(ii) The volume setting needed for each frequency is higher in the new experiment.

Describe how the sound waves reach Mia and why they sound more faint.


Sound travels through particle vibration. A wall is denser than air as a result they need more energy to reach Mia as the wall's density means more particles ~~are~~ ~~to~~ ~~reach~~ ~~through~~.

[2]



(c) Mia reads on the internet that the human ear is most sensitive at a frequency about 2000 Hz.

Describe how James and Mia could improve their experiment to test this hypothesis.

They would need to use a computer that can emit a sound up to 2000 Hz ~~fully~~ A. Then they could carry out the experiment increasing volume settings to heard. Repeat the experiment taking multiple attempts ^(or readings) in order to create an average volume setting. Then compare the data. They could also use a higher ^{range or} volume setting such as 0.5  etc to get a better idea of how sensitive their ears are as it would provide a larger sample size. [3]



7 Ali investigates electromagnetic induction.

He pushes a magnet quickly into a coil of wire. He uses an ammeter to record the biggest current produced in the coil.

He repeats the experiment for coils with different numbers of turns.

Table 7.1 shows his results.

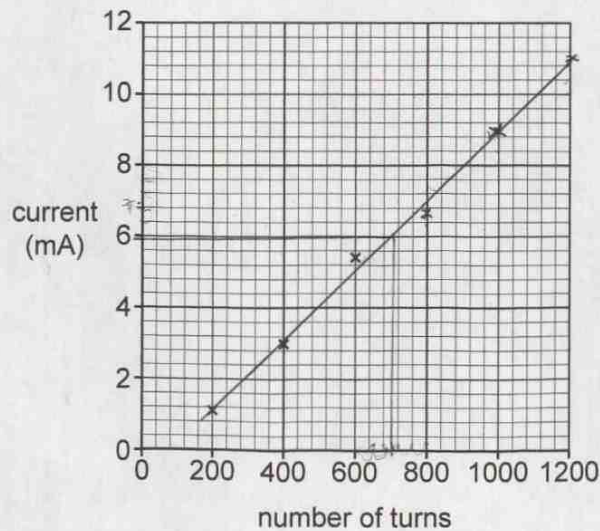
Number of turns	Current (mA)
200	1.1
400	3.0
600	5.4
800	6.7
1000	9.1
1200	11.0

Table 7.1

(a) Explain why a current is produced in the coil.

As an alternating voltage is induced which causes an alternating current to be induced as well as the coil of wire alternates around the magnet. [2]

(b) (i) Complete the graph by plotting the missing results in Table 7.1 and draw a line of best fit.



[2]



- (ii) Use your line of best fit to determine the maximum current that Ali could produce if he used a coil with 700 turns.

Maximum current = 6 mA [1]

- (iii) Amaya says that this experiment is not valid because the speed of the magnet may be different each time.

Suggest how Ali could control the speed of the magnet.

Electric motor to push in the magnet
therefore controlling speed via the ~~magnet~~ motor. [1]

- (c) As Ali pushes the magnet towards the coil, he feels a small repulsive force.

Explain why.

As the magnet may of been repelled by
the coil as like charges ~~repel~~. This occurred
as the coil has positive and ~~and~~ negative
parts leading to repulsion or attraction. In
this case he was repulsed. [2]



8 Table 8.1 shows data for four radioactive isotopes.

Isotope	Half life	Type of decay
molybdenum-98	stable	alpha
molybdenum-99	66 hours	beta
technetium-99m	6 hours	gamma
thallium-201	73 hours	gamma

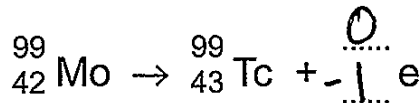
Table 8.1

Technetium-99m is used in hospitals.

Technetium-99m is produced when molybdenum-99 emits beta radiation.

One method of producing molybdenum-99 is by firing neutrons at molybdenum-98.

(a) Complete these nuclear equations to show the production of technetium-99m.



[2]

(b) Molybdenum-99 is produced in nuclear reactors and then transported to hospitals. It may take several days for the molybdenum-99 to be transported.

In the hospital molybdenum-99 decays and the technetium-99m is produced as shown in part (a).

Using information from Table 8.1, explain why technetium-99m is not transported directly to hospitals.

As gamma decay can lead to gamma radiation which could ionise cells of anyone exposed which could damage cells leading to mutations which may cause cancer. Therefore, ~~being sent~~ ^{not transported} as hospitals ~~have~~ ^{are} ~~high~~ ^{density of} ~~radiation~~ ^{hazardous}. [2]



- (c) Production of technetium-99m is becoming more expensive. An alternative for many medical procedures is thallium-201.

A patient is injected with a compound containing thallium-201. After 24 hours, 80% of the thallium-201 has not decayed.

A second patient is injected with a compound containing technetium-99m.

- (i) Calculate the percentage of technetium-99m remaining after 24 hours.

$$-6\text{hr} = 50\%$$

$$-12\text{hr} = 25\%$$

$$-18\text{hr} = 12.5\%$$

$$-24\text{hr} = 6.25$$

Percentage remaining = 6.25 % [2]

- (ii) A doctor is deciding which radioactive isotope is best to use.

Dr Phillips

Using technetium-99m is safer for the patient than using thallium-201.



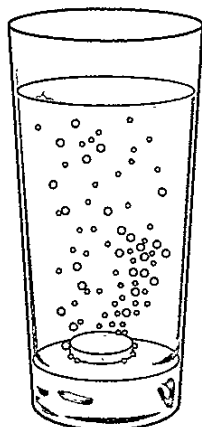
Evaluate this statement.

Use the data in Table 8.1 and the information above in your answer.

As it has a shorter half life it will decay faster in the patient reducing the time exposed to radiation which has harmful side effects. [2]



- 9 The picture shows a glass of water with a vitamin tablet at the bottom.



The tablet reacts with the water to produce bubbles of carbon dioxide.

The tablet stays at the bottom of the glass. The bubbles rise to the top of the glass.

- (a) Which **two** of the statements below, taken together, explain why the bubbles rise but the tablet sinks?

Tick (✓) **two** boxes.

The bubbles are made of gas, but the tablet is solid.

The material in the tablet is denser than water.

The tablet is heavier than the bubbles.

The water pressure at the bottom of the glass is greater than the water pressure at the top.

Water is denser than the gas in the bubbles.

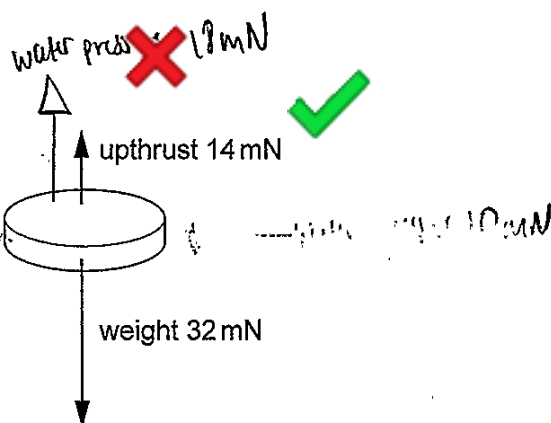
[1]



(b) The diagram below is a free-body diagram for the tablet resting on the bottom of the glass.

Two of the forces acting on the tablet have already been drawn.

Draw **one** further force for the tablet and label it with its name and magnitude.



[2]

(c) (i) Explain what causes the force of upthrust that acts on the tablet.

~~The upthrust is caused by the difference in pressure of water and as forces react in pairs,~~
 as weight causes the tablet to sink, an upthrust is created by the ^{equal} pressure of water pushing against the tablet to not be displaced. [2]

(ii) The upthrust on the tablet is bigger than the upthrust on any one bubble.

Give a reason for this.

As it has a bigger mass.

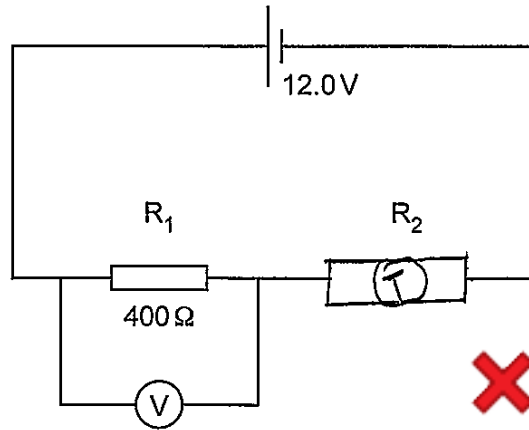
[1]

$$W = m \times g$$



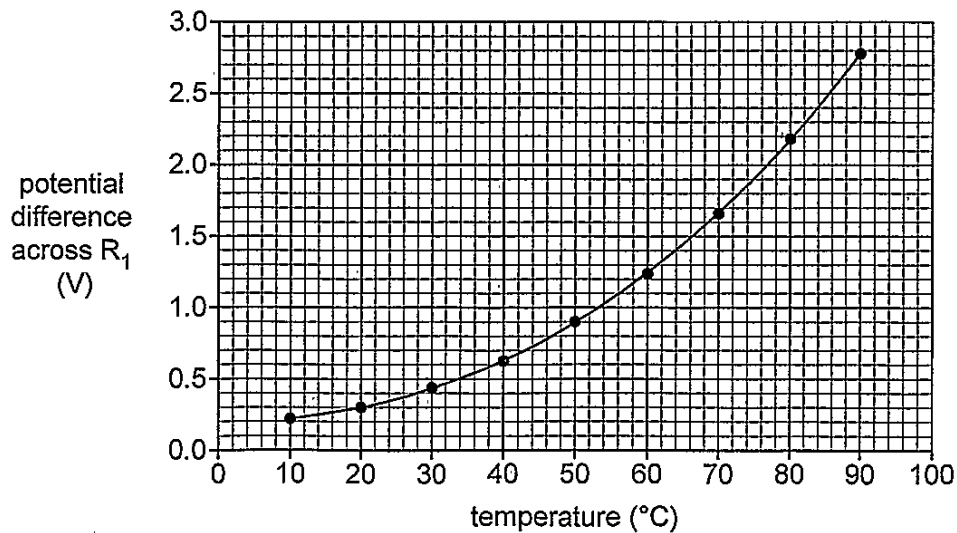
- 10 Alex wants to use a thermistor as a temperature sensor.

He sets up the circuit shown below.



- (a) Draw the symbol for a thermistor in the space labelled R_2 . [1]
- (b) To investigate the sensitivity of the thermistor, Alex places it in a water bath with a temperature control.

He records the potential difference across R_1 for different temperatures set by the water bath. His results are shown in the graph.



- (i) Describe and explain the relationship shown in the graph.

As ~~temperature~~ temperature rises, so does resistance. This shows a positive correlation. This is caused by heat causing the particles to be more excited and move faster and collide with each other which causes higher resistance as it is harder for current to flow. [3]

BOD




- (ii) Alex plans to use the sensor to monitor temperature in a greenhouse. To find the temperature, Alex will measure the potential difference across R_1 .

He will then read the temperature off the graph.

Alex

My temperature sensor will be more sensitive at lower temperatures.



Evaluate Alex's statement using evidence from the graph.

Alex is correct as most of greenhouses have plants which ~~are~~ are in climates of low temperature than most of the graph. Therefore, the sensor will be more sensitive as it picks up more readings. [2]



(c) Mr Orton, Alex's teacher, says that his temperature sensor will not work properly.

Mr Orton

Your temperature sensor will always be slightly hotter than the surroundings, so it will always give a measurement that is slightly too high.



(i) What is the name of this type of error?

Systematic error [1]

(ii) Explain why Mr Orton is correct, and suggest how this problem could be reduced.

As the sensor works by taking energy in as a result it is hotter. This ~~error~~^{problem} could be reduced by using an electric sensor and placing the starting value slightly lower. Therefore, counter reacting. [2]



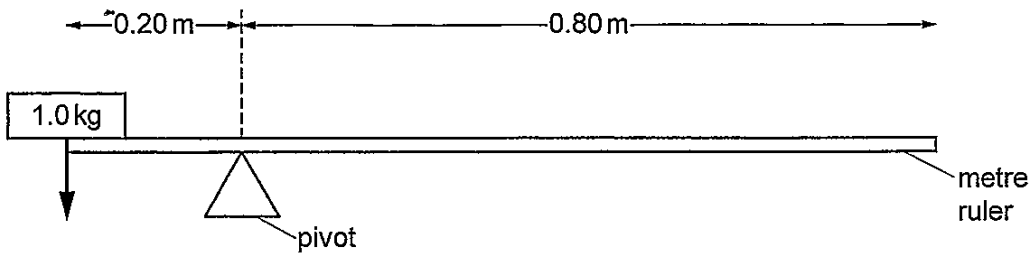
BLANK PAGE

PLEASE DO NOT WRITE ON THIS PAGE



- 11 Jack investigates using weights to balance a seesaw. He makes the seesaw out of a metre ruler with a pivot placed at the 20 cm mark, as shown in the diagram.

He places a 1.0 kg mass with its centre exactly at one end of the metre ruler.



- (a) Calculate the moment of the 1.0 kg mass about the pivot, in units of Nm.

Use the equation: moment of a force = force × distance (normal to the direction of the force)

gravitational field strength = 10 N/kg

~~1 kg × 0.20 = 0.2 N/kg~~

10 kg × 0.2 = 2

1.0 kg mass = 1.0 × 10 N

~~1.0 kg~~ = 10 kg (weight)

Moment = 2 [m, s]



- (b) Jack predicts where he should put masses on the right-hand side of the seesaw to make it balance.

He then carefully places those masses at points which make the seesaw balance and measures the actual distances to the pivot.

The table shows his results.

Mass (g)	Predicted distance to pivot (m)	Measured distance to pivot (m)
400	0.50	0.46
600	0.33	0.31
800	0.25	0.23
1000	0.20	0.19

- (i) The measured distances to the pivot are all slightly smaller than the predicted distances to the pivot.

Explain why.

Human error as he is unable to ^{precisely} ~~accurately~~ predict the distance. [1]

- (ii) Suggest one way to improve his experiment to remove this difference.

Use a more accurate scale to measure distance. [1]



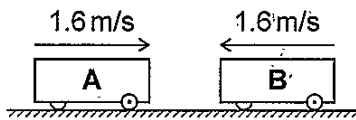
12 Trolley A of mass 5.0 kg moves at a constant speed of 1.6 m/s.

(a) Calculate the momentum of trolley A.

$$5 \times 1.6 = 8$$

Momentum = 8 kg m/s [2]

(b) Trolley B of mass 2.5 kg heads straight towards the first trolley in the opposite direction at the same speed of 1.6 m/s.



Trolley A of
mass 5 kg

Trolley B of
mass 2.5 kg

$$M = MV$$

The two trolleys collide and stick together.

(i) Show that the velocity of the joined-up trolleys after the collision is about 0.5 m/s.

$$A = 5 \times 1.6 \quad B = 1.6 \times 2.5$$

$$A = 8 \text{ kg m/s} \quad B = 4$$

$$8 + (-4) = 4 \text{ kg m/s} = mv$$

$$4 \text{ kg m/s} = (5 + 2.5) \times v$$

$$4 = 7.5 \times v$$

$$\frac{4}{7.5} = v$$

$$v = 0.53 \text{ which is about } 0.5 \text{ m/s}$$

[4]



- (ii) The collision takes a total time of 0.20 s.

Calculate the average force acting on trolley A during the collision.

$$\text{Resultant} = \frac{\Delta m}{t}$$



$$= \frac{1-4}{0.2}$$

$$= \frac{4}{0.2}$$

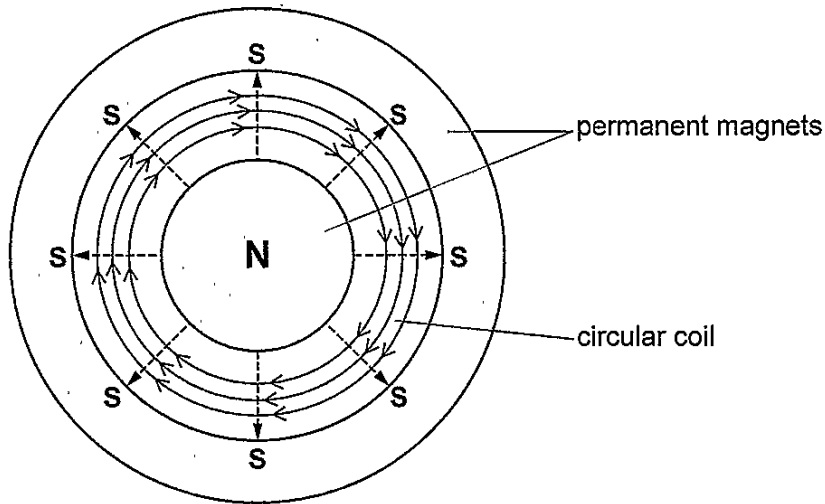
$$= 20$$

Average force = 20 N [4]



- 13 The diagram shows part of a loudspeaker. It contains specially-shaped permanent magnets with south poles, **S**, in a ring around the outside and a circular north pole, **N**, in the centre.

In the gap between the shaped magnets there is a circular coil carrying electrical current.



The direction of the magnetic field between the poles is shown as ----->.

The magnetic field through the coil has strength 0.40T .

The coil has circumference 25mm and has 200 turns. The diagram shows only 3 turns of this coil.

A clockwise current of 0.60A in the coil produces a force on the coil.

- (a) What is the direction of the force on the coil?

Tick (\checkmark) **one** box.

Anti-clockwise

Clockwise

Into the page

Out of the page

[1]



(b) Calculate the magnitude of the force acting on the coil.

$$0.40 \times 25 \times 0.60 = 6 \text{ N}$$

Force = 6 ✓✓ [4]

END OF QUESTION PAPER



ADDITIONAL ANSWER SPACE

If additional space is required, you should use the following lined page(s). The question number(s) must be clearly shown in the margin(s).

Lined area for writing answers, consisting of a vertical margin line on the left and horizontal dotted lines for writing.



Area with horizontal dotted lines for writing.

OCR
Oxford Cambridge and RSA

Copyright Information

OCR is committed to seeking permission to reproduce all third-party content that it uses in its assessment materials. OCR has attempted to identify and contact all copyright holders whose work is used in this paper. To avoid the issue of disclosure of answer-related information to candidates, all copyright acknowledgements are reproduced in the OCR Copyright Acknowledgements Booklet. This is produced for each series of examinations and is freely available to download from our public website (www.ocr.org.uk) after the live examination series.

If OCR has unwittingly failed to correctly acknowledge or clear any third-party content in this assessment material, OCR will be happy to correct its mistake at the earliest possible opportunity.

For queries or further information please contact the Copyright Team, First Floor, 9 Hills Road, Cambridge CB2 1GE.

OCR is part of the Cambridge Assessment Group; Cambridge Assessment is the brand name of University of Cambridge Local Examinations Syndicate (UCLES), which is itself a department of the University of Cambridge.

