

Candidate Marks Report

Series : 6 2018

This candidate's script has been assessed using On-Screen Marking. The marks are therefore not shown on the script itself, but are summarised in the table below.

Centre No :	Assessment Code :	H420
Candidate No :	Component Code :	01
Candidate Name :		

Total Marks : 50 / 100

In the table below 'Total Mark' records the mark scored by this candidate.
'Max Mark' records the Maximum Mark available for the question.

Paper:	H420/01
Paper	50 / 100
Total:	
Question	Total / Max Mark Mark
1	1 / 1
2	1 / 1
3	1 / 1
4	0 / 1
5	1 / 1
6	1 / 1
7	0 / 1
8	1 / 1
9	0 / 1
10	1 / 1
11	1 / 1
12	1 / 1
13	1 / 1
14	1 / 1
15	0 / 1
16ai	1 / 2
16aii	2 / 2
16bi	1 / 1
16bii	1 / 3
16c	1 / 3
17ai	2 / 4
17aii	0 / 1
17b	0 / 2
17ci	2 / 2
17cii	2 / 2
18a	2 / 6
18b	0 / 3
18c	1 / 1
19a	0 / 3
19b	4 / 4

19c	3 / 6
20ai	3 / 3
20aai	1 / 2
20bi	0 / 3
20bii	0 / 2
21ai	2 / 4
21aai	1 / 2
21aaii	2 / 3
21b	1 / 1
22ai	0 / 3
22aai	1 / 2
22aaii	1 / 1
22b	NR / 2
23a	3 / 3
23b	NR / 4
23ci	1 / 2
23cii	1 / 3

SECTION A

You should spend a maximum of 20 minutes on this section.

Write your answer to each question in the box provided.

Answer all the questions.

- 1 Which of the following statements, A to D, correctly explains a feature of an efficient gaseous exchange surface?
- A The layers are thin for a short diffusion distance.
- B There is a good blood supply, so the system reaches equilibrium quickly. ✗
- C There is an increased surface area to reduce surface area to volume ratio. ✗
- D Ventilation takes place to reduce concentration gradient of dissolved gases.

Your answer

A

[1]



- 2 The following are a series of organic molecules and the chemical processes that occur to convert them into different molecules.

Which of the rows, A to D, is correct?

- A nucleic acid $\xrightarrow{\text{hydrolysis}}$ nucleotide $\xrightarrow{\text{hydrolysis}}$ polynucleotide ✗
- B α -glucose $\xrightarrow{\text{condensation}}$ amylopectin $\xrightarrow{\text{hydrolysis}}$ α -glucose
- C amino acid $\xrightarrow{\text{condensation}}$ dipeptide $\xrightarrow{\text{hydrolysis}}$ polypeptide ✗
- D β -glucose $\xrightarrow{\text{condensation}}$ cellulose $\xrightarrow{\text{condensation}}$ maltose ✗

Your answer

B

[1]



- 3 The following table describes the approximate percentage mass of different chemical elements in organic polymers.

	Polymer	N (%)	C (%)	O (%)	H (%)	P (%)
A	nucleic acid	20.0	30.0	20.0	10.0	20.0
B	carbohydrate	0.0	33.3	33.3	33.3	0.0
C	protein	30.0	10.0	10.0	0.0	50.0
D	lipid	0.0	50.0	49.0	1.0	0.0

Which of the rows, A to D, is correct?

Your answer

A



[1]

Turn over for the next question



4 Which of the following statements, **A** to **D**, about DNA replication is correct?

A T
C G

- A** RNA will bind to DNA through complementary base-pairing.
- B** The distance between the strands in the double helix will always be the same.
- C** The proportion of adenine in a nucleic acid will always equal the proportion of guanine. X
- D** The formation of phosphodiester bonds will occur in the same direction on each strand during DNA replication. ✓

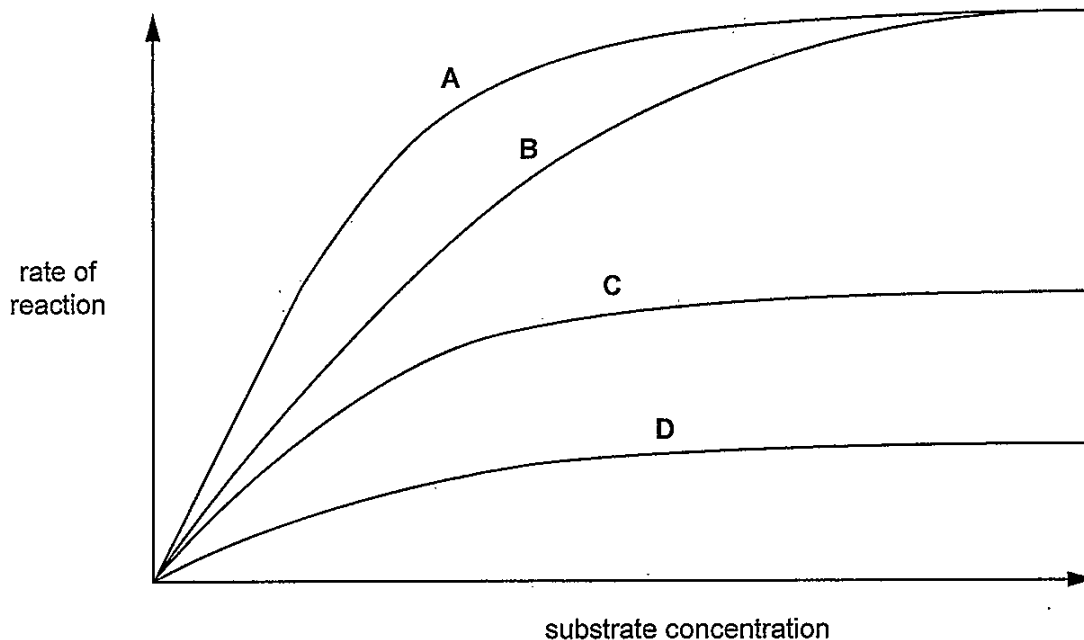
Your answer

B

[1]



5. The following graph shows the rate of reaction of an enzyme in different substrate concentrations.



Which letter, **A** to **D**, shows the rate of reaction with a fixed quantity of competitive inhibitor?

Your answer

B



[1]



6 Which of the statements, **A** to **D**, applies to transpiration **and** evaporation?

- A It occurs at a faster rate at higher humidity.
- B It occurs at a slower rate at greater wind speed.
- C It occurs at a slower rate at higher temperature.
- D It occurs at the surface of leaves.

Your answer

D



[1]

7 Which of the statements, **A** to **D**, explains why diastole follows systole in the mammalian heart?

- A Cardiac muscle is myogenic.
- B Cardiac muscle takes a short time to repolarise after being stimulated.
- C The aorta is capable of maintaining the pressure generated by the left ventricle.
- D The SAN receives impulses from the AVN.

Your answer

D



[1]

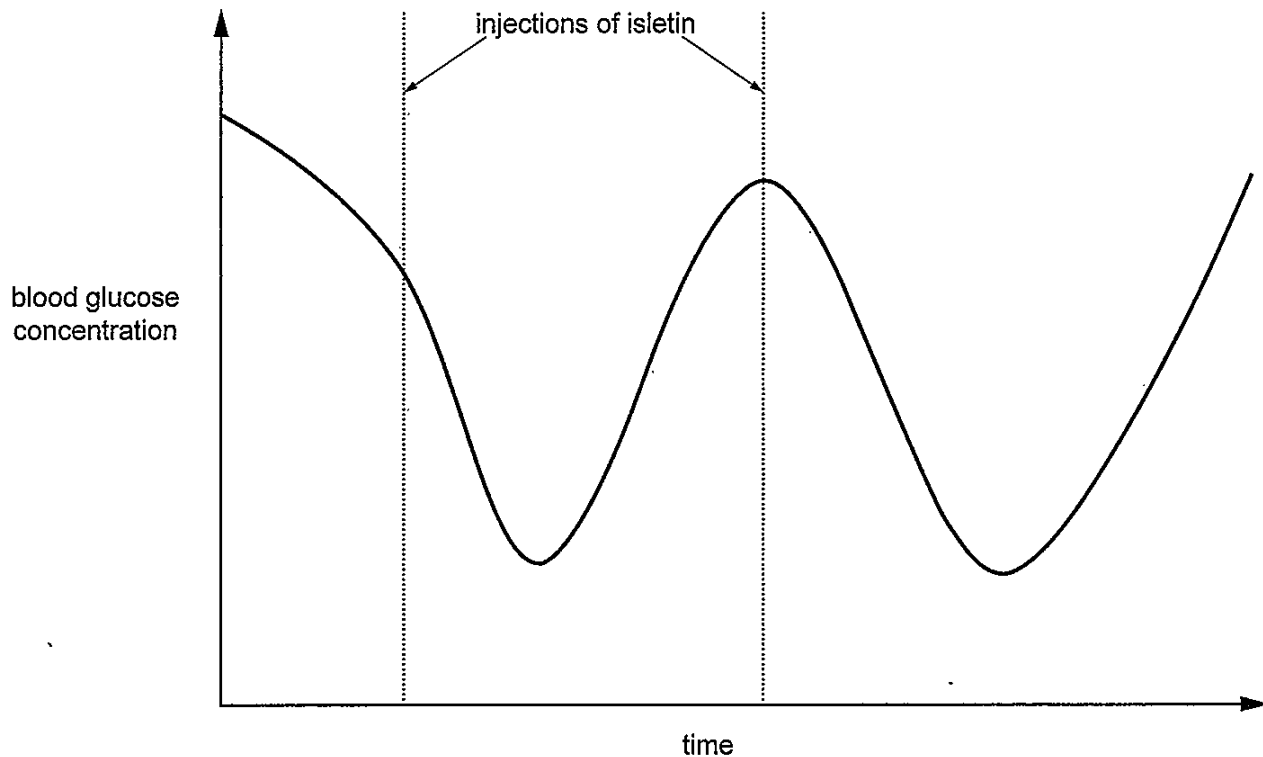


8 Banting and Best pioneered experiments into the functions of the pancreas.

In one experiment, they removed the pancreas of dogs. Shortly afterwards, the dogs developed the symptoms of diabetes.

- Banting ground up the removed pancreas to produce an extract.
- He called the extract "isletin".
- The isletin was then injected into dogs that had had their pancreas removed.
- He then tested the blood glucose concentration.

The graph below is a summary of the results.



Which of the following statements correctly explains these results?

- 1 Isletin is made in the α cells in the islets of Langerhans.
- 2 Isletin reduces blood glucose concentration.
- 3 The effects of isletin are short-lived.

- A 1, 2 and 3
 B Only 1 and 2
 C Only 2 and 3
 D Only 1

Your answer

C

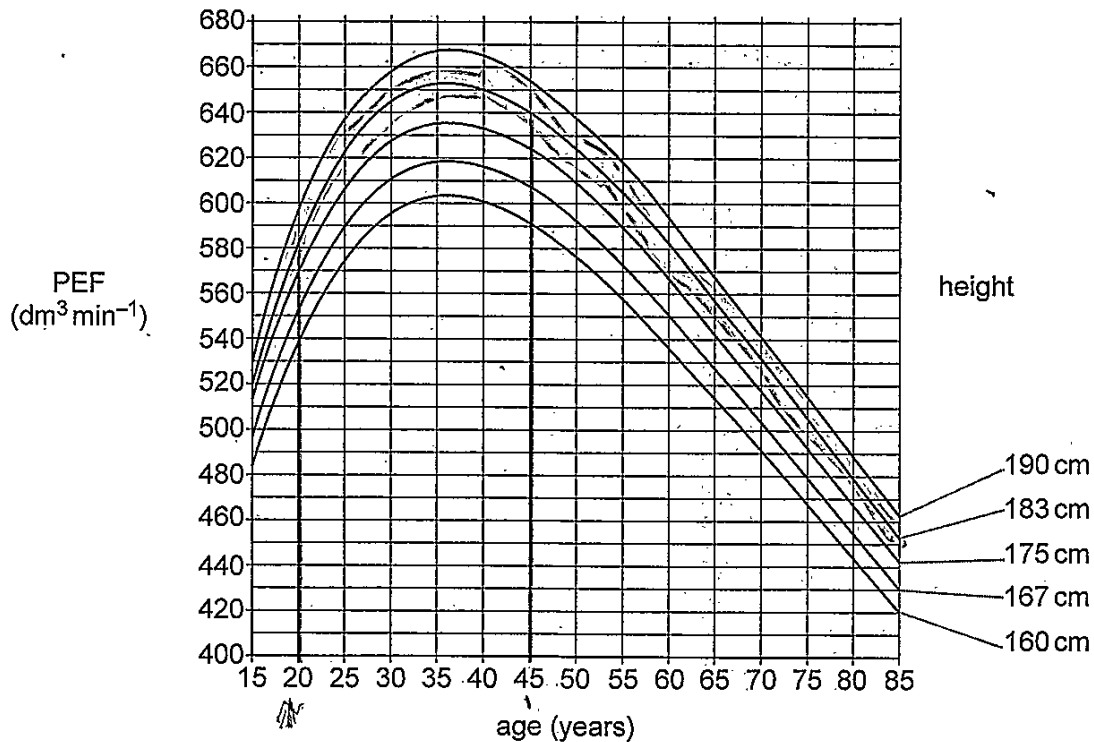


[1]



9 Peak expiratory flow (PEF) is a measure of the maximum rate at which a person can exhale.

The graph below shows the typical PEF values for men of different ages and heights.



Which of the following is the percentage increase from the PEF of a 20 year old man of 175 cm to the PEF of a 45 year old man of 183 cm?

- A 19.4%
- B 10.9%
- C 12.3%
- D 8.1%

Your answer

B



$$\frac{20 - 45}{20} \times 100$$

$$\frac{580 - 540}{540} \times 100$$

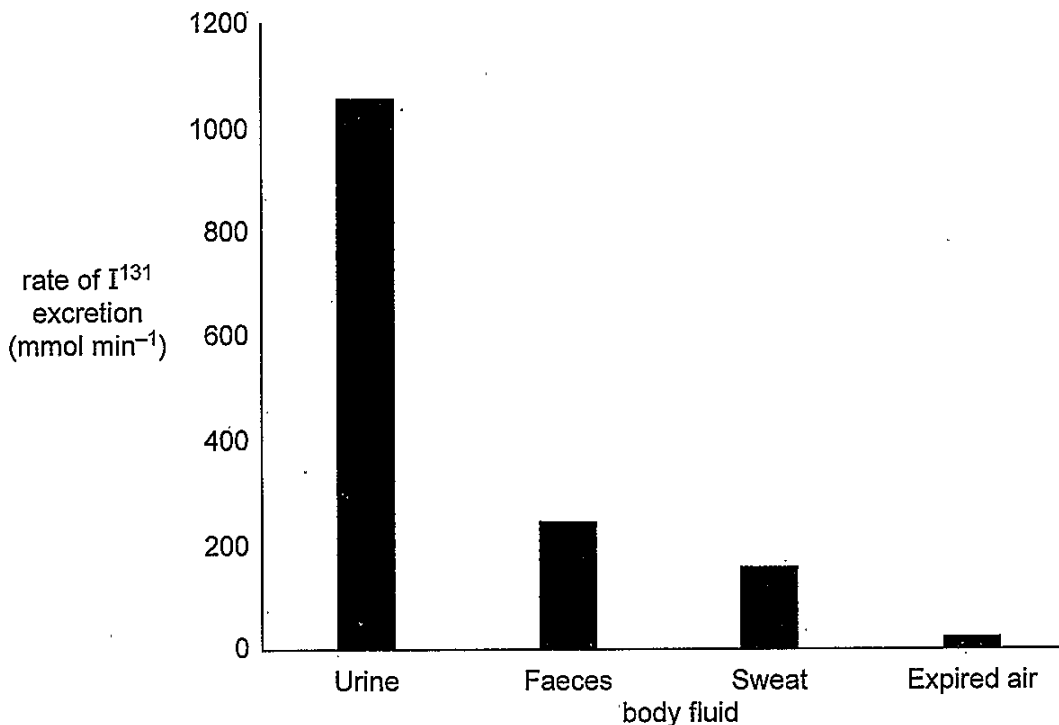
[1]



10 One treatment for thyroid cancer is radioactive iodine. The radioisotope I^{131} is used.

The thyroid gland absorbs any iodine that enters the body, so the radioactive isotope kills the cancerous cells in the thyroid gland. The I^{131} is then excreted from the body.

Different body fluids excrete different proportions of I^{131} , as shown in the following graph.



Which of the following, **A** to **D**, correctly explains the different proportions of I^{131} in each body fluid?

- A** I^{131} is very soluble in water.
- B** I^{131} is able to cross capillary walls.
- C** The kidneys are more efficient at excreting I^{131} than the lungs.
- D** The thyroid gland is well supplied with blood.

Your answer

A
 C
 B
 D



[1]



11 Which of the following, A to D, is a similarity in the way ATP is made in respiration and photosynthesis?

- A both involve NAD
- B both involve substrate level phosphorylation
- C both involve photons
- D both involve proton gradients

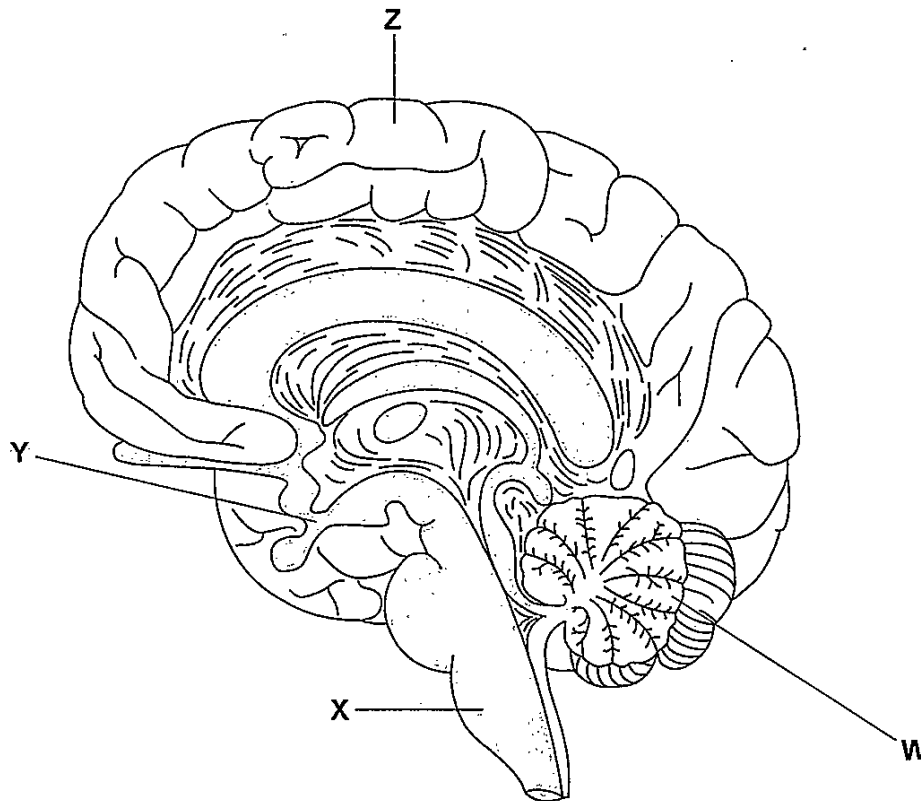
Your answer

D

[1]



12 The image below is a diagram of the human brain.



Which of the labelled regions would be directly involved in learning to play a musical instrument?

- A W and X
- B W and Y
- C W and Z
- D Y and Z

Your answer

C


[1]



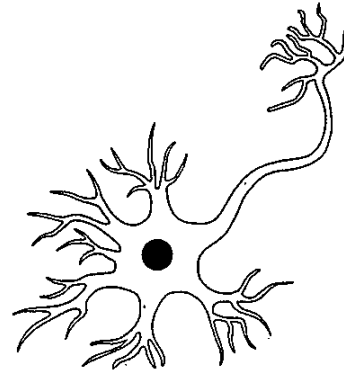
Turn over



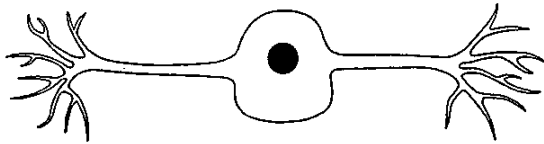
13. Which of the following diagrams, A to D, shows a sensory neurone?



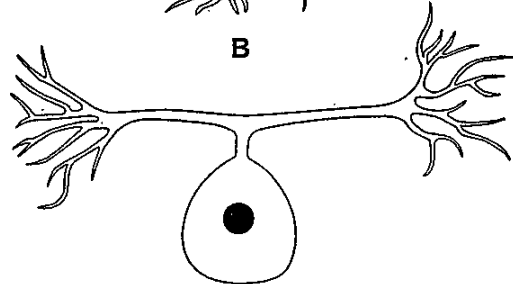
A



B



C



D

Your answer

D



[1]



- 14 The table below shows the membrane potentials of different neurones at a cholinergic synapse. The data were recorded on five separate occasions, as shown in the five rows.

Membrane potential (mV)				
	<i>Presynaptic neurone A</i>	<i>Presynaptic neurone B</i>	<i>Presynaptic neurone C</i>	<i>Postsynaptic neurone</i>
1	+40	-70	-70	-70
2	-70	+40	-70	-70
3	-70	-70	+40	-70
4	+40	+40	-70	-70
5	+40	+40	+40	+40

Which of the following, A to D, explains these data?

- A divergence
- B hyperpolarisation
- C spatial summation
- D temporal summation

Your answer

C



[1]

- 15 The drug metoprolol prevents stimulation of post-synaptic receptors in the sympathetic nervous system.

Which of the following conditions could this drug be used to treat?

- 1 Muscle fatigue
- 2 Tachycardia
- 3 High blood pressure

- A 1, 2 and 3
- B Only 1 and 2
- C Only 2 and 3
- D Only 1

Your answer

B



[1]



SECTION B

Answer all the questions.

16 (a) Gestational diabetes is a medical condition that affects pregnant women. It results in high levels of glucose in the blood, even though the woman produces normal levels of insulin.

(i) Gestational diabetes is most similar to which **other** type of diabetes?

Explain your answer.

Type 2 diabetes, because it results in high blood sugar levels as the individual can't secrete enough insulin ~~to assist~~ due to receptors ~~cells~~ on the β cells of islets of Langerhans not being ~~reactive~~ enough. [2]

(ii) Suggest **two** ways a woman with gestational diabetes can manage her condition.

1. Controlling her diet so that it contains less sugar.
2. By injecting insulin to help control blood sugar levels.

[2]

(b) (i) Skeletal muscle is one of the main tissues where glucose is removed from the blood in response to insulin.

Name the other tissue.

Liver [1]

(ii) Explain why glucose is required for the contraction of skeletal muscle.

Glucose is broken down and in the process ATP is ~~released~~ ~~and~~ ATP helps the binding and unbinding of myosin heads to receptor sites on the actin filament. [3]



- (c) During late pregnancy, women find ventilation more difficult, as the developing foetus reduces the volume of the thorax. This can lead to tiredness and difficulty breathing.

A student used a spirometer to measure ventilation in a woman who was 36 weeks pregnant.

Fig. 16.1 shows the trace produced.

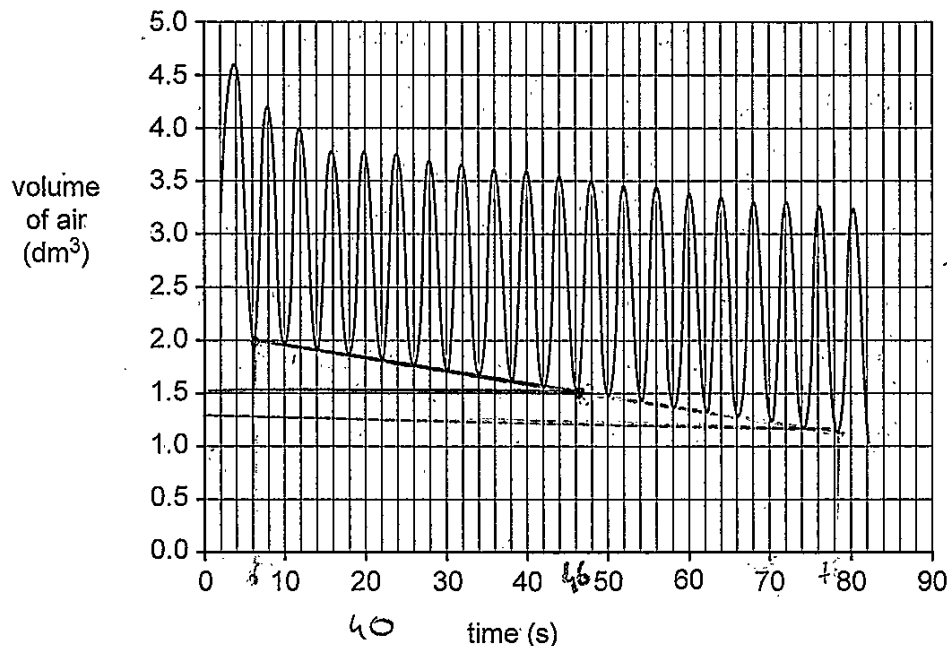


Fig. 16.1

Mean oxygen uptake rate at rest in women is around $0.020 \text{ dm}^3 \text{ s}^{-1}$.

Using these data, the student made the following conclusion:

My data show that being pregnant reduces rate of oxygen uptake by up to 20%.

Evaluate this claim, using the data in Fig. 16.1.

$$\text{Rate of oxygen uptake in fig 16.1} = \frac{1.5}{40} = 0.0375$$

$$20\% \text{ of } 0.020 = 4 \times 10^{-3}$$

$$4 \times 10^{-3} < 0.020$$

$0.020 - 4 \times 10^{-3} = 0.016$ ∴ her statement is wrong because ~~more~~ of the oxygen uptake in figure 16.1 is more than 20%.

[3]



- 17 (a) Chromista are photosynthetic protocists that live in water.

Chromista are different from other photosynthetic organisms because they contain the pigment chlorophyll c.

Chlorophyll c is not found in plants.

- (i) Outline the importance of photosynthetic pigments in photosynthesis.

Photosynthetic pigments help to absorb light of different wavelengths in photosynthesis. The photons of light absorb have energy which is used to promote electrons from chlorophyll molecule and excite them to higher energy state.

[4]

- (ii) The wavelengths of light absorbed by chlorophyll c are different from those wavelengths absorbed by chlorophyll a and chlorophyll b.

Suggest why Chromista need pigments that are different from those of other photosynthetic organisms.

Because they need to be in an environment that requires absorb maximum absorption of

[1]

The wavelengths of light are different under water and cannot be absorbed efficiently by chlorophylls a and b.



(b) Fig. 17.1 is a diagram of the chloroplast found in a Chromista cell.

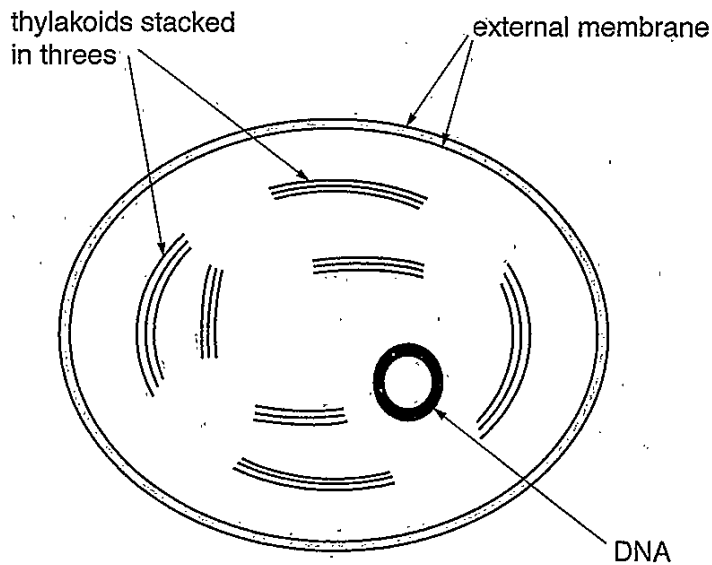


Fig. 17.1

Outline the structural differences between the Chromista chloroplast in Fig. 17.1 and the chloroplasts found in flowering plants.

This chloroplast is round whereas ~~that~~ ^{those} found in plants is rectangular.

There is no cell wall, whereas chloroplasts in plants have cell walls instead of an external membrane.

[2]



(c) Fig. 17.2 is a diagram of part of the plasma membrane of a Chromista cell.

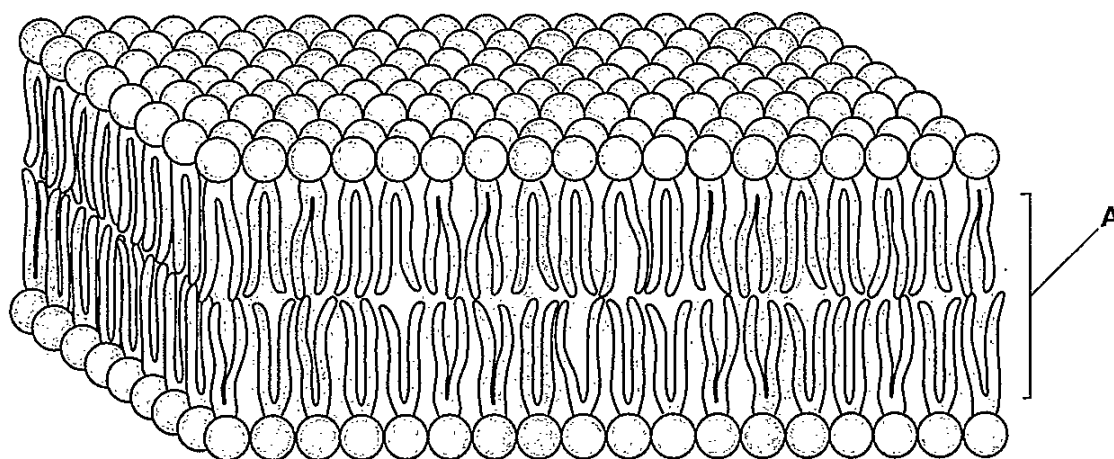


Fig. 17.2

- (i) State and explain how **one** property of region A in Fig. 17.2 contributes to the stability of the plasma membrane.

Cholesterol molecules are found in between lipids tails. They reduce the fluidity of the phospholipids ~~area~~ by preventing them from moving around which maintains the stability of the membrane. [2]

- (ii) There are differences between the plasma membrane and membranes within cells.

Outline the role of membranes **within** cells.

They separate membrane bound organelles from the cytoplasm environment to protect their contents and ~~also~~ prevent damage to the cell. For example lysosomes need to be kept ~~is~~ enclosed in a membrane bound vesicle (lysosome) so that the hydrolytic enzymes don't damage the cell. [2]

SEEN



18 (a)* Plants lose water by transpiration.

The rate of transpiration varies between different species of plant.

The rate of transpiration can be measured using a potometer.

Plan an investigation into the rate of transpiration in two species of plant that would allow valid data to be collected.

Details of how to set up a potometer are not required.

The two species of plants used would need to be healthy and of similar age. The apparatus would need to be prepared in the the same way. For example the temperature of the water used would need to be kept constant in both apparatus. The sample of the leaves must be of similar size.

~~The water taken for~~

Similar measurements have to be taken for both plants.

11

[6]



- (b) Plant cell walls are made of cellulose. Cellulose is a polymer of β -glucose.

Give three properties of cellulose that make it suitable as the basis of plant cell walls.

1. The microfibrils cross over each other to increase the strength of the cellulose structure.
2. The structure is fully permeable to water.
3. The structure can withstand pressure hence prevents the cells from bursting. [3]

- (c) Cellulose cannot be digested by animals. Some mammals have bacteria in their stomachs that produce enzymes that can digest cellulose.

Explain whether the action of these enzymes is intracellular or extracellular.

Extracellular because the bacteria would secrete the enzymes into the mammal's stomach in order to digest the cellulose material. [1]



DO NOT WRITE IN THIS MARGIN

- 19 Honeypot ants belong to several different genera. Some specialised individuals are used as food storage vessels. These individuals have swollen abdomens that store various foods, which can be given to members of the colony when required.

One such individual is shown in Fig. 19.1.



Fig. 19.1

An investigation was carried out into the respiratory substrate of three different genera of honeypot ant, by measuring oxygen uptake and carbon dioxide production.

The data are shown in Table 19.1.

Genus	CO ₂ produced (mm ³ s ⁻¹)	O ₂ consumed (mm ³ s ⁻¹)
<i>Camponotus</i>	0.89	0.88
<i>Melophorus</i>	0.59	0.66
<i>Cataglyphis</i>	1.01	1.47

Table 19.1



DO NOT WRITE IN THIS MARGIN

(a) Use the data in Table 19.1 to suggest the likely diet of each genus of honeypot ant.

Justify your answer.

Genus	Diet	Justification
<i>Camponotus</i>	mainly carbohydrate	More CO_2 Greater CO_2 released which means more energy released from substrate.
<i>Melophorus</i>	mainly lipid	Lipids generate less energy.
<i>Cataglyphis</i>	mainly protein.	Proteins generate less energy hence even smaller amount CO_2 released in given time.

[3]



- (b) Chitin is a polysaccharide found in insects. It is used to form the hard outer casing of their bodies.

Fig. 19.2 shows the chemical structure of chitin.

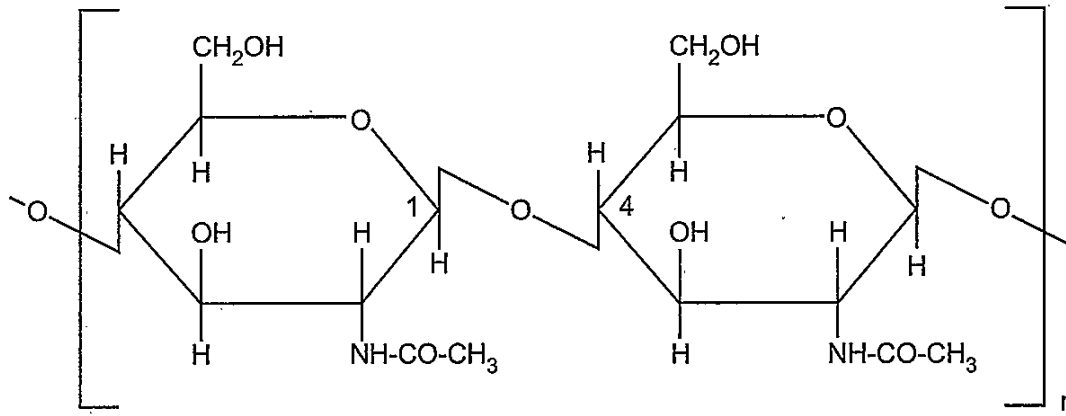


Fig. 19.2

Using information from Fig. 19.2, state **two** similarities and **two** differences between the structures of chitin and glycogen.

Similarity 1 *It forms 1,4 glycosidic bonds.* ✓

Similarity 2 *They're both ~~polymers~~ addition polymers.* ✓

Difference 1 *No branches on chitin ~~forming~~ 1,6 glycosidic bonds.* ✓

Difference 2 *Glycogen doesn't have a nitrogen containing group attached to carbon 3 on its isomers.* ✓

[4]



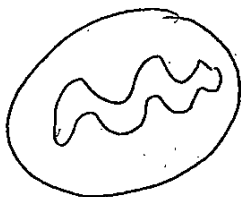
DO NOT WRITE IN THIS MARGIN

(c)* Insects use glucose to generate ATP.

Outline the processes involved in the generation of ATP through chemiosmosis.

The FAD and NAD that have been reduced to ~~coenzyme~~ FADH and NADH ~~split~~ that are oxidised again so that their ~~protons~~ H^+ ions split into protons and electrons. The electrons pass down the electron transport chain which consist of a ferrous group (Fe^{2+}) which is oxidised to Fe^{3+} when the electrons pass to the next electron carrier. As this happens energy is released. This energy is used to pump protons from the ~~outer~~ intermembrane space into the matrix. A hydrogen ion potential builds up and the hydrogen ions diffuse out of the matrix down their concentration gradient via ~~ATP synthase~~ ATP synthase. ~~which~~ This process causes [6] the production of ATP from ADP and P_i .

L2 A



- 20 (a) A student carried out an investigation into the effect of ethanol on the permeability of cell membranes in beetroot.

The student's method comprised the following five steps:

1. Cut equal sized pieces of beetroot using a cork borer.
2. Wash the pieces in running water.
3. Place the pieces in 100 cm³ of different concentrations of ethanol.
4. After 5 minutes, remove samples from each of the ethanol solutions.
5. Place each of the samples into a colorimeter to collect quantitative data.

- (i) Each step in the student's method relies on certain assumptions.

For each assumption listed below, select the **numbered step** from the student's method that relies upon that assumption.

Assumption A

Pigment will only leak into the solution if membranes are disrupted.

Assumption A relates to step 3 ✓

Assumption B

Absorbance is proportional to concentration of pigment.

Assumption B relates to step 5 ✓

Assumption C

Pigment will be released when the beetroot is sliced.

Assumption C relates to step 2 ✓

- (ii) The student kept the ethanol solutions at a constant temperature. State **two other** variables which need to be controlled in this investigation to ensure the data collected are valid.

1. The beetroot samples must be taken from same beetroot.
 2. The size of the samples must be constant. ✓
- [2]



(b) Fig. 20.1 shows the graph plotted by the student.

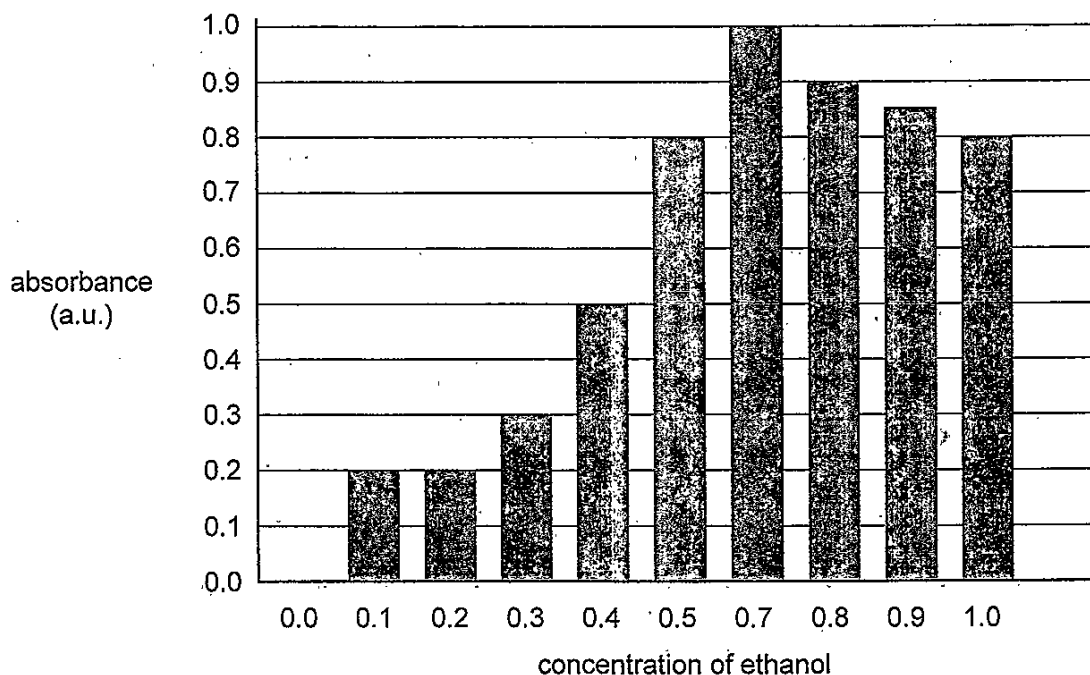


Fig. 20.1

(i) Make three criticisms of the way the student has displayed these results.

1 ~~There is a~~ The bar graph makes the relationship between the ethanol concentration and absorbance hard to see.

2

3

[3]

(ii) Explain how carrying out replicates would improve this investigation.

replicates provides more data so that you can compare the results and calculate percentage increase and decrease to evaluate the data more scientifically.

[2]



- 21 (a) The greater blue-ringed octopus, *Hapalochlaena lunulata*, is one of the most venomous of all animals.

Its bite contains tetrodotoxin (TTX), a neurotoxin that can cause paralysis and death within minutes.

- (i) The following information has been discovered about the effects of TTX on nerve cells:
- TTX binds to the external surface of the voltage-gated sodium ion channels in the axon membrane.
 - Binding of TTX changes the tertiary structure of the channel.
 - This means the channel cannot open.

Using the information provided, explain how TTX affects the activity of neurones.

TTX prevents neurones from transmitting an action potential because the voltage gated sodium ion channels cannot open. These channels cause the depolarisation of the membrane to reach the threshold of -40mV so that the impulse can be transmitted. It also prevents the voltage gated sodium ion channels from transmitting action potentials along its neurone by local currents because they can't open. [4]



- (ii) A common cause of death from TTX poisoning is suffocation (not getting enough oxygen) as a result of paralysis of the diaphragm.

Explain how paralysis of the diaphragm could lead to suffocation.

The diaphragm would not be able to receive impulses at its neuromuscular junction so it wouldn't get the signal to contract. This remaining relaxed which means that the thorax cavity would not change in volume to allow ~~an~~ oxygen intake. [2]

- (iii) TTX is also known to reduce the speed of conduction in the Purkyne fibres of the heart. SEEN

Suggest and explain what effect this would have on the heart rate.

This would lower heart rate because the purkyne fibres would delay the conduction of impulses to the ventricles thus ventricular systole would take place at a lower rate. This would affect the

[3]

- (b) Molluscs such as *H. lunulata* have unmyelinated neurones. Saltatory conduction cannot occur in these neurones.

Why is transmission of action potentials along the axon slower in the absence of saltatory conduction?

Because depolarisation has to occur along the whole length of the neurone whereas myelinated neurones conduct impulses from node of Ranvier to node of Ranvier only. [1]



22 (a) A scientist used a respirometer to investigate the rate of respiration and photosynthesis of maize in different light intensities.

- The scientist placed ten maize seedlings in a respirometer and kept it in the dark for three hours.
- The respirometer contained soda-lime to remove any CO_2 produced by the seedlings.
- The scientist placed ten maize seedlings in a separate respirometer without soda-lime and placed it in different light intensities for three hours at a time.

Light intensity (lux)	Distance moved by fluid in respirometer (mm)
0	-3.7
1020	-0.8
1510	0.0
1700	1.2
2000	2.9

Table 22.1

- (i) The diameter of the capillary tubing was 0.1 mm.

The volume of a cylinder can be calculated using the following formula:

$$\text{volume of cylinder} = \pi r^2 l$$

Calculate the **rate of oxygen uptake** by the seedlings in the dark. Give your answer to **two significant figures**. Show your working.

Working



Answer = mm^3h^{-1} [3]

- (ii) 1700 lux is a typical light intensity on a cloudy day in the UK. Calculate the percentage increase in gas production between 1700 and 2000 lux. Show your working.

$$\frac{1.2 - 2.9}{1.2} \times 100 = 141.6$$

Answer = 141.6 % [2]



(iii) Suggest why soda-lime was **not** placed in the respirometer with the seedlings grown in the light.

Because CO_2 ~~was~~ ~~not~~ would be removed as the seedlings photosynthesise.



[1]

(b) The scientist made the following claim:

These results suggest that, in maize seedlings, the rate of photosynthesis only exceeds the rate of respiration when the light intensity is above 1510 lux.

Use the data in Table 22.1 to explain why the scientist made this claim.

.....
.....
.....
.....
.....
..... [2]



Turn over



23 (a) A student looked at slides of different tissues under a light microscope.

The four viewed images are labelled W, X, Y and Z in Fig. 23.1, on the insert.

Identify tissues W, X and Y.

W Liver
 X Pancreas
 Y Skeletal muscle

[3]

(b) The student wrote the following summary about the control of heart rate.

When the heart rate is too low the level of carboxylic acid in the blood becomes higher than normal. The vagus nerve sends action potentials to the AVN to increase the contraction rate of the heart muscle. The baroreceptors in the walls of the blood vessels then detect that the pH of the blood is normal, so heart rate can return to resting.

The endocrine system can also change heart rate. Release of the hormone adrenaline from the adrenal medulla causes the smooth muscle of the heart to contract more frequently.

Identify and correct any biological errors in the student's summary.

.....

 [4]



DO NOT WRITE IN THIS MARGIN

(c) Reflex actions are rapid responses that protect the body from harm.

The Moro reflex is found in babies up to five months of age, and occurs when the baby feels its head is suddenly no longer supported. The Moro reflex is made up of the following responses:

- The baby spreads out its arms then brings them together rapidly.
- The baby cries.

(i) Suggest how the Moro reflex helps to prevent harm to a newborn baby.

~~The~~ When the baby spreads out its arms it helps with their balance. when it cries it gets attention from the carer which could be likely to hold the baby's head. [2]

(ii) The Moro reflex gradually disappears and usually stops completely after babies reach nine months. Other reflexes develop as children grow older.

Describe a reflex response a 3-year-old child would make to an object moving towards their eyes and explain the advantage of this response.

The optical response is due to sensory receptors in both eye lids of the eye. The response is advantageous as it only involves three sensor neurones and ~~depth~~ bypasses the conscious area of the brain. [3]

END OF QUESTION PAPER



ADDITIONAL ANSWER SPACE

If additional space is required, you should use the following lined page(s). The question number(s) must be clearly shown in the margin(s).

Lined area for writing answers, featuring a vertical margin line on the left and horizontal dotted lines. A red box with the letters "BP" is centered in the middle of the page.

OCR
Oxford Cambridge and RSA

Copyright Information

OCR is committed to seeking permission to reproduce all third-party content that it uses in its assessment materials. OCR has attempted to identify and contact all copyright holders whose work is used in this paper. To avoid the issue of disclosure of answer-related information to candidates, all copyright acknowledgements are reproduced in the OCR Copyright Acknowledgements Booklet. This is produced for each series of examinations and is freely available to download from our public website (www.ocr.org.uk) after the live examination series.

If OCR has unwittingly failed to correctly acknowledge or clear any third-party content in this assessment material, OCR will be happy to correct its mistake at the earliest possible opportunity.

For queries or further information please contact the Copyright Team, First Floor, 9 Hills Road, Cambridge CB2 1GE.

OCR is part of the Cambridge Assessment Group; Cambridge Assessment is the brand name of University of Cambridge Local Examinations Syndicate (UCLES), which is itself a department of the University of Cambridge.

